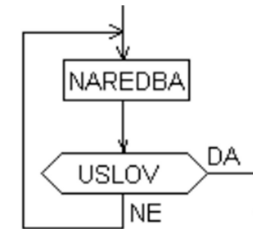
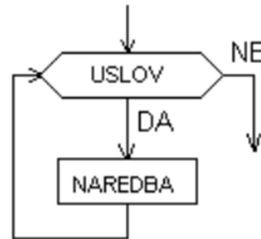
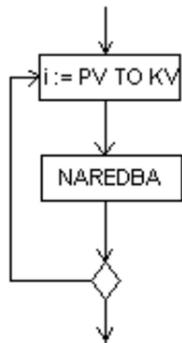


Algoritmi sa ciklusima (petlje) - FOR, WHILE i REPEAT



1. Nacrtati algoritam i napisati program koji će ispisati trocifrene brojeve manje od 350 pomoću naredbe **FOR, WHILE i REPEAT**

